

P.S.M PUBLIC SCHOOL

REVISION WORKSHEET

CHAPTER - 8 SYMMETRY & PATTERN

CLASS - III

1. Complete the following patterns.

a) 2, 4, 6, 8, _____, _____, _____

b) A1, B2, C3, _____, _____, _____

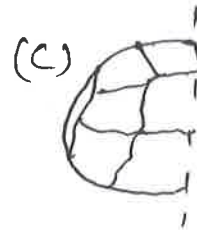
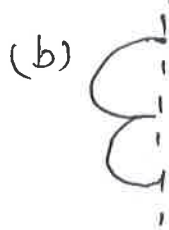
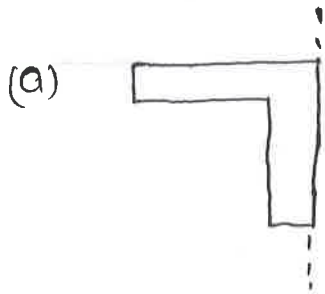
c) Abc, Bcd, CDe, _____, _____, _____

d) 1045, 1055, 1065, _____, _____, _____

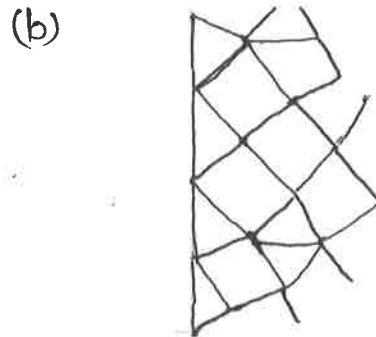
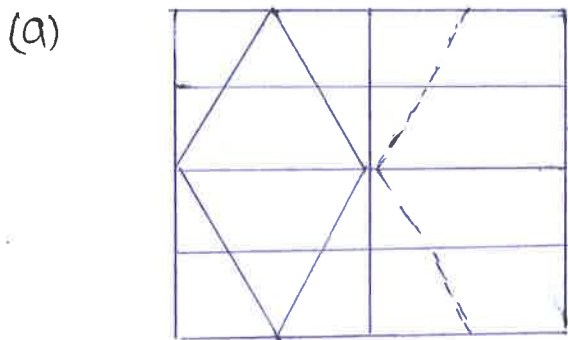
e) 20, 70, 120, 170, _____, _____, _____

2. Draw any 4 symmetrical shapes?

3. Draw the mirror image of the following



4. Complete the following tessellation and colour it



5. Draw a line of Symmetry for the following

